


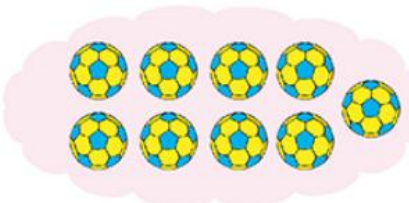
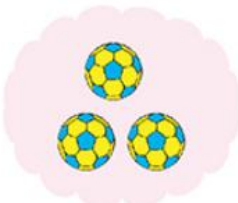
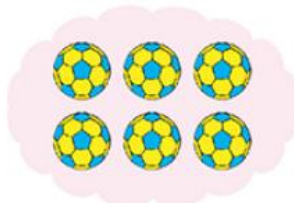





Modellerle gösterilen toplama işlemlerini yazınız.


$$\begin{array}{r} 3 \\ + 1 \\ \hline 4 \end{array}$$




3 + 1 = 4



..... + ..... = .....

$$\begin{array}{r} \dots \\ + \dots \\ \hline \dots \end{array}$$


..... + ..... = .....

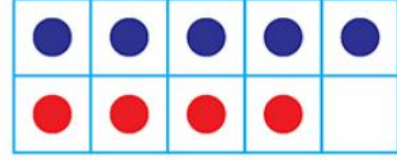
$$\begin{array}{r} \dots \\ + \dots \\ \hline \dots \end{array}$$


..... + ..... = .....

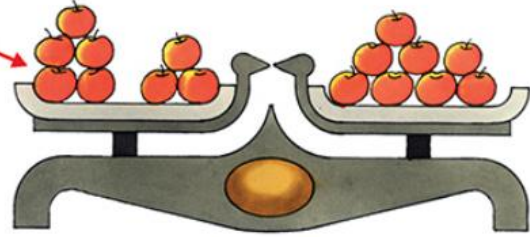
$$\begin{array}{r} \dots \\ + \dots \\ \hline \dots \end{array}$$

Toplama işlemlerini yapınız. Modelleriyle örnekteki gibi eşleştiriniz.

$$5 + 3 = 8$$




$$3 + 2 = \dots$$




$$4 + 4 = \dots$$



$$5 + 4 = \dots$$



$$5 + 5 = \dots$$



$$4 + 3 = \dots$$

